


**activity sheet 14**  
**ADVANCEMENTS IN AGRICULTURE**



**I. Which Is Which?**

Find each pair of images in the database, using the keyword search.  
Write an *a* or *b* in the blank to identify which picture is which.





Which shows a Holt product?  
\_\_\_\_\_

Which shows a Buffalo Pitts product?  
\_\_\_\_\_



Which shows a railroad car to carry milk and cream?  
\_\_\_\_\_

Which shows a railroad car to carry fish?  
\_\_\_\_\_



Which shows a 26 horse harvester?  
\_\_\_\_\_

Which shows a 22 mule harvester?  
\_\_\_\_\_




Which shows asparagus canning?  
\_\_\_\_\_

Which shows a peach cannery?  
\_\_\_\_\_

**activity sheet 14**  
**ADVANCEMENTS IN AGRICULTURE**

**I. Which Is Which?**

Find each pair of images in the database, using the keyword search.  
 Write an *a* or *b* in the blank to identify which picture is which.





Which shows a Holt product?

\_\_\_\_\_ **a** \_\_\_\_\_

Which shows a Buffalo Pitts product?

\_\_\_\_\_ **b** \_\_\_\_\_





Which shows a railroad car to carry milk and cream?

\_\_\_\_\_ **b** \_\_\_\_\_

Which shows a railroad car to carry fish?

\_\_\_\_\_ **a** \_\_\_\_\_



Which shows a 26 horse harvester?

\_\_\_\_\_ **a** \_\_\_\_\_

Which shows a 22 mule harvester?

\_\_\_\_\_ **b** \_\_\_\_\_



Which shows asparagus canning?

\_\_\_\_\_ **b** \_\_\_\_\_

Which shows a peach cannery?

\_\_\_\_\_ **a** \_\_\_\_\_